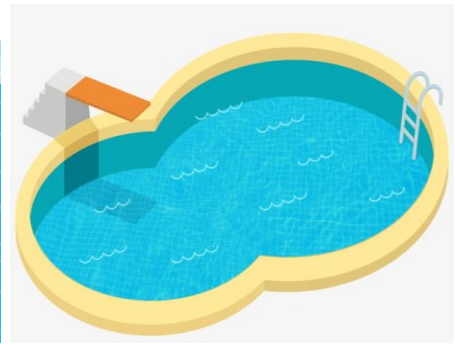
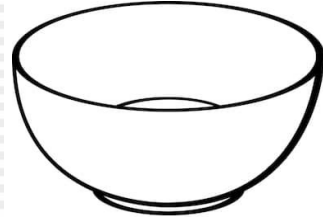



Name: _____

Put a **blue** circle around the **empty** objects. Put a **red** circle around the **full** objects.



How many items are empty?

How many items are full?